



2021
March


<https://www.mceducation.com.hk/mcgs/>



Test Paper

Inspiring General Studies > Learning Resources > Test paper & Exam paper

P3-6 Book 6 Total 4 papers.






Question bank

Primary 5 ⑥ The Amazing Universe

Module 1: Rotating stars

3. The teacher said Jessie is a good girl. What did she do?

A	B	C
		

()

4. Which of the following **is not** a good behaviour at class?

A. eating

B. listen to the teachers

C. keep quiet ()

5. When should we keep a correct posture?

A. Sitting

B. Walking

C. All of the above ()

6. What should we do before having a meal?

A. Take a shower

B. Wash our hands

C. Wash our hair ()

Part 1 Fill in the blanks: Fill in the blanks with appropriate word(s).
(21 marks in total, each answer carries 3 marks)


star	planet	revolution	gas
burning	rotation	air	

1. Earth rotates on an imaginary axis from the west to the east. This is called _____.

2. Earth revolves around the Sun. This is called _____.

3. On the moon, there is no water or _____.


4.



I am the Sun and a _____. I am made of a huge group of _____ and keep _____ to emit very bright light and heat.

5.


I am the Earth. I do not grow and am a _____ revolves around the Sun.



EXAM Paper

Inspiring General Studies > Learning Resources > Test paper & Exam paper

P1-6 2nd term Total 6 papers.



Exam Paper (2nd Term)

Primary 3

- ④ A Journey Of History And Culture
- ⑤ Hong Kong Is My Home
- ⑥ Exploring Nature And Science

Part 3 **Circle:** Circle the answers.(8 marks in total, each answer carries 2 marks)

- The greatest distinction between Bauhinia blakeana and Phanera purpurea is that Bauhinia blakeana (has / has no) fruits.
- The Murray is a historical building preserved by (revitalisation / rebuilding / conservation) .
- Heat is transferred from an area of (lower / higher) to another area of (lower / higher) temperature.

Part 4 **Matching:** Write the correct letter in the ().
(14 marks in total, each answer carries 2 marks)

- What were the use of the historical buildings below?





(1) Blue House	()	A. military facility
(2) Shing Mun Redoubt	()	B. religious facility
(3) Yau Ma Tei Theatre	()	C. residential facility
(4) St. John's Cathedral	()	D. communal facility
- Which type of disabled persons receives help from these facilities?

(1) Ramp	()	A. visually impaired persons
(2) Dynamic route maps	()	B. hearing impaired persons
(3) Touching floor plan	()	C. physically impaired persons

Exam paper (2nd Term) Primary 1(Book3-4)

Part 4 **Classify:** Write the correct letters on the lines.
(20 marks in total, each answer carries 2 marks)

- Which are animals? Which are plants?

 A	 B
 C	 D

Animals: _____

Plants: _____
- Are these activities suitable for day time or night time?

A. Appreciating flowers	B. Observing stars
C. Appreciating lighting decoration	D. Eating breakfast
E. Appreciating fireworks	

Activities suitable for day-time : _____

Activities suitable for night-time : _____